

Name Answer Key

Unit 1 Study Guide

***Parents, you do not need to return this study guide to school. It is for your child to practice and work through as homework all next week leading up to the assessment (it is not expected that your child finish it all in one night). An answer key will be shared with you to check your child's work.**

***Assessment will be on Friday, September 14th**

Creating Routines Using Data


NBT.1

1.) Fill in the missing numbers in the chart below.

0	1	2	3	4	5	6	7	8	9
10	11	12	13	14	15	16	17	18	19
20	21	22	23	24	25	26	27	28	29
30	31	32	33	34	35	36	37	38	39
40	41	42	43	44	45	46	47	48	49
50	51	52	53	54	55	56	57	58	59
60	61	62	63	64	65	66	67	68	69
70	71	72	73	74	75	76	77	78	79
80	81	82	83	84	85	86	87	88	89
90	91	92	93	94	95	96	97	98	99

NBT.1

2.) What number is represented by the ten frames below?



37

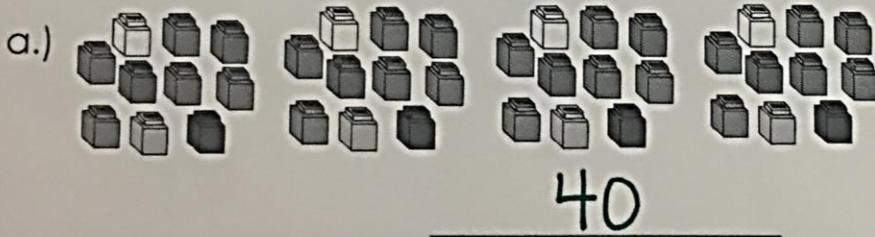
NBT.1

3.) Count by 1s to fill in the missing numbers.

101	102	103	104	105	106	107	108	109	110
111	112	113	114	115	116	117	118	119	120

NBT.1

4.) Write the number of objects shown below.



b.) Write the next two numbers.

41 42

NBT.1

5.) Show the number below in 2 different ways using numbers, pictures, and/or words.

14

1st Way

fourteen

or

|||| |||| ||||


or

$10 + 4 = 14$

2nd Way

0000000000
0000

or



or

$20 - 6 = 14$

NBT.1

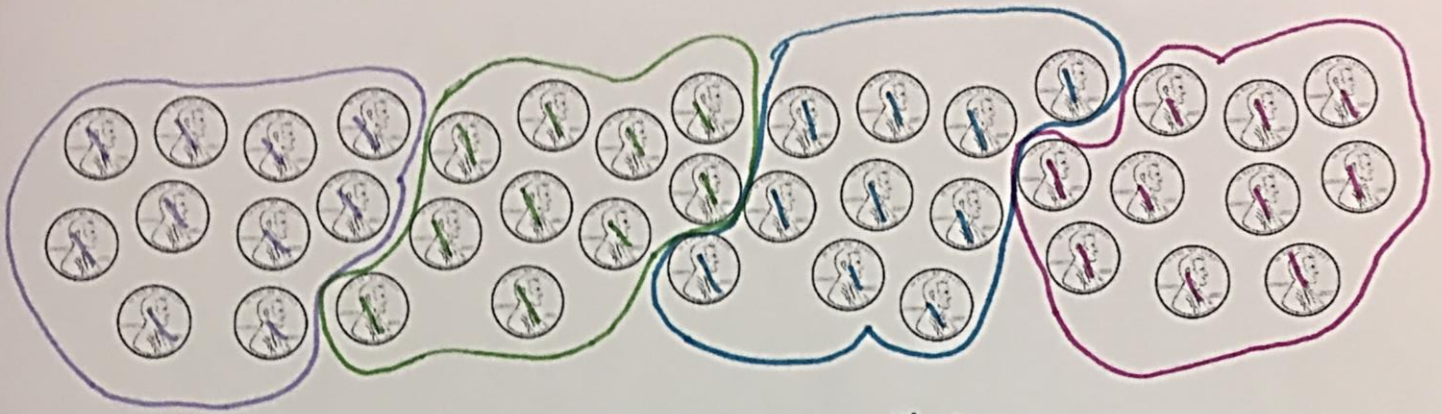
6.) What is 1 less and 1 more than the given numbers?

One Less	Number	One More
48	49	50
79	80	81

NBT.1

7.) Pierce has the number of coins shown below.

a. Show how he could group the coins so he can easily show the number of coins he has.



b. How many coins does Pierce have? 40

NBT.1

8.) Find the number 46 on the chart below. Use **place value** to explain how you found the number 46.

0	1	2	3	4	5	6	7	8	9
10	11	12	13	14	15	16	17	18	19
20	21	22	23	24	25	26	27	28	29
30	31	32	33	34	35	36	37	38	39
40	41	42	43	44	45	46	47	48	49
50	51	52	53	54	55	56	57	58	59
60	61	62	63	64	65	66	67	68	69
70	71	72	73	74	75	76	77	78	79
80	81	82	83	84	85	86	87	88	89
90	91	92	93	94	95	96	97	98	99

* I found 40 by tens and

46 by ones.

* I counted down by tens to

40 and counted over by ones

to 46.

* I go to the 40's row
and then over 6 spaces.